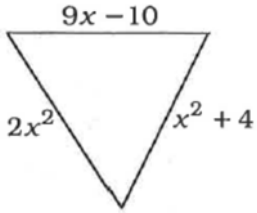
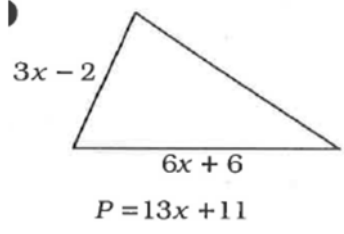
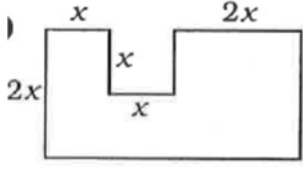
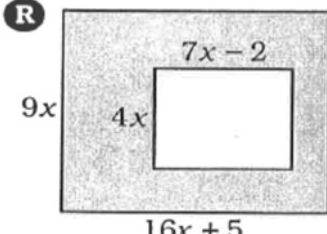
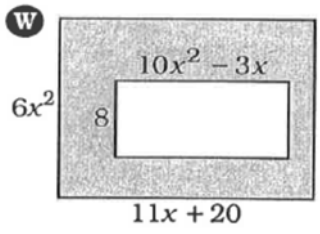
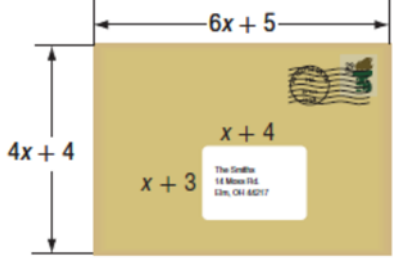


**Perimeter and Area**

No work shown = No Credit

<p>1. Find the perimeter</p> 	<p>2. Find the missing side a triangle</p> 
<p>3. Find the area</p> 	
<p>4. Find the area of the shaded region</p> <p><b>R</b></p> 	<p>5.</p> <p><b>W</b></p> 
<p>6. The mailing envelop shown has a mailing label on the front.</p> <p>a) Find the area of the label</p> <p>b) Find the area of the envelope not covered by the label</p>	
<p>7. A square garden is surrounded by a walkway of width x.</p> <p>a) Write an expression for the area of the garden.</p> <p>b) Write an expression for the area of the walkway and the garden</p>	