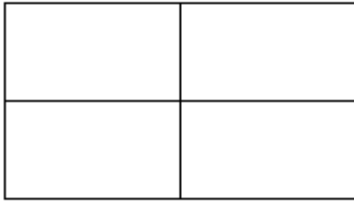
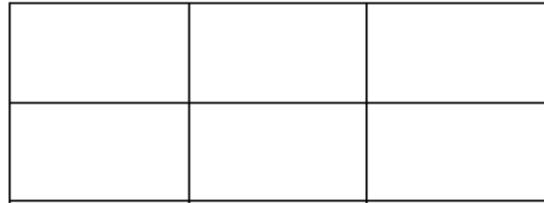


7. $(9 - x)(4 + x^3)$



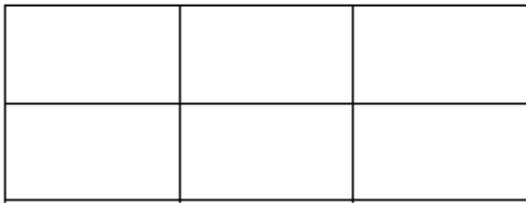
ANSWER: _____

8. $(x - 4)(x^2 - 2x + 6)$



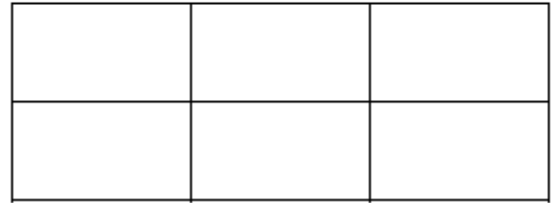
ANSWER: _____

9. $(2x - 3)(4x^2 - 3x + 3)$



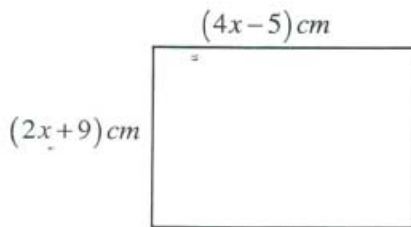
ANSWER: _____

10. $(6x + 2)(2x^3 + x + 1)$



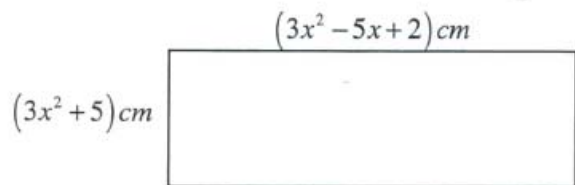
ANSWER: _____

Area and Perimeter Word Problems



Area: _____

Perimeter: _____



Area: _____

Perimeter: _____